



SUBJECT NAME –MATH  
GRADE- 2

WORKSHEET

**Unit -2**  
**Numbers up to 200**

**Look at the numbers and fill in the blanks:**

a) 175

The face value of the digit in the hundreds place is \_\_\_\_\_.

The digit 5 is in the \_\_\_\_\_ place.

The place value of 7 is \_\_\_\_\_.

b) 134

The place value of 1 is \_\_\_\_\_.

The face value of the digit in the ones place is \_\_\_\_\_.

The digit 3 is in the \_\_\_\_\_ place.

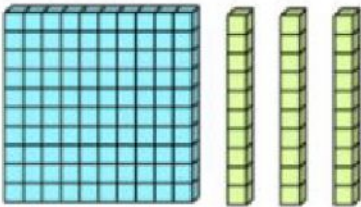
**I. Fill in the blanks with the number that comes just before and just after the given numbers.**

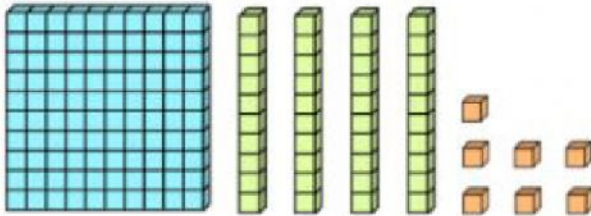
a) \_\_\_\_\_ 149 \_\_\_\_\_

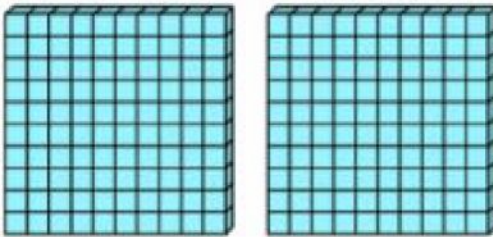
b) \_\_\_\_\_ 190 \_\_\_\_\_

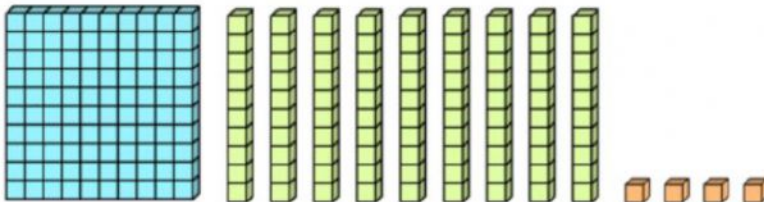
c) \_\_\_\_\_ 129 \_\_\_\_\_

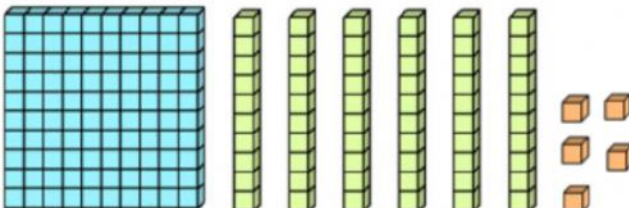
III. Write the number .













IV. Arrange the numbers in ascending order

101, 174, 124, 197

V. Arrange the numbers in descending order

156, 112, 192, 148

VI. Represent the number using spike abacus

- a. 156
- b. 178

VII. Write the expanded form of the following

- a. 164
- b. 127